

Relie les heures comme il convient :

08.23

05.00

06.10

13.50

07.00

24.00

18.57

03.15

12.45

12.30

It's midnight.

It's twenty-three past eight.

It's five o'clock.

It's ten past six.

It's ten to two.

It's seven o'clock.







It's half past **Twelve.**

It's almost seven o'clock.


It's quarter to one.

It's quarter past three.

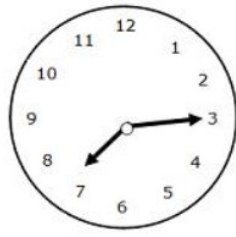
What time is it ?




## Correction




it's ten past three.




It's a quarter past seven.



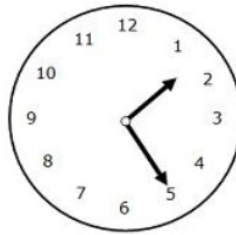
It's half past nine.




It's twenty to two.




It's five to five.



It's twenty-five past one.



It's ten o'clock.



It's five past six.

08.23	It's twenty-three past eight.
-------	-------------------------------

05.00	It's five o'clock.
-------	--------------------

06.10	It's ten past six.
-------	--------------------

13.50	It's ten to two.
-------	------------------

07.00	It's seven o'clock.
-------	---------------------

24.00	It's midnight.
-------	----------------

18.57	It's almost seven o'clock.
-------	----------------------------

03.15	It's quarter past three.
-------	--------------------------

12.45	It's quarter to one.
-------	----------------------

12.30	It's half past <table border="1"><tr><td>Twelve.</td></tr></table>	Twelve.
Twelve.		